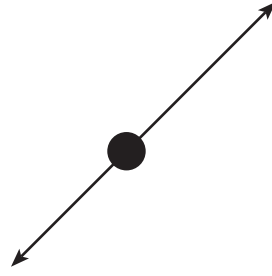
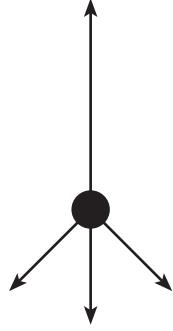
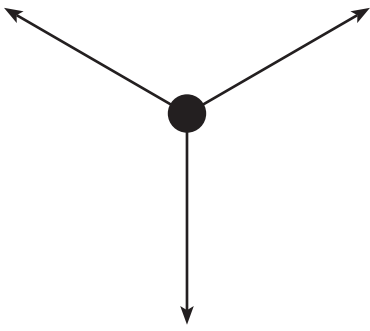


Use a ruler to draw the x and y components of each force vector. Note that the length of the vector represents the magnitude of the force. Using estimated measurements of each vector, determine which of these sets of forces is in equilibrium. In other words the object the forces are acting on is at rest. Circle your answers.



Explain your answer.