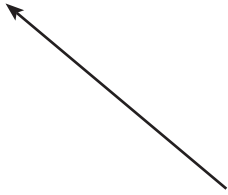
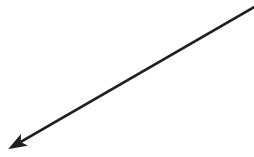


Using dotted lines, draw the horizontal and vertical components for each vector shown below. Show only one pair of the components.

1) 40 m, 40° from horizontal



2) 45N, 70° from vertical



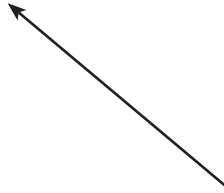
3) 15 ft, 80° from horizontal



4) 6 mi, 0° from vertical



5) 2N, 40° from horizontal



6) 50 m/s², 90° from vertical

